
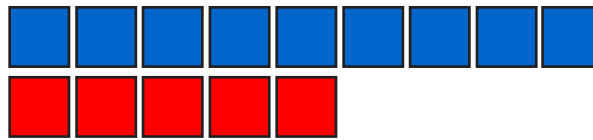



How many more to make 9?




$$7 + \square = 9$$



$$5 + \square = 9$$



$$6 + \square = 9$$



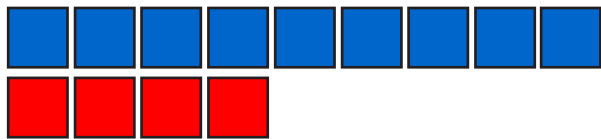
$$8 + \square = 9$$



$$3 + \square = 9$$




$$2 + \square = 9$$



$$4 + \square = 9$$



$$1 + \square = 9$$



$$9 + \square = 9$$